

# Subtraction

Horizontal 0-5: T2S1

1)  $5 - 2 =$

2)  $2 - 0 =$

3)  $3 - 3 =$

4)  $5 - 1 =$

5)  $1 -$

$- 3 =$

7)  $4 -$

$- 1 =$

9)  $2 -$

$- 0 =$

## PREVIEW

Gain complete access to the largest collection of worksheets in all subjects!

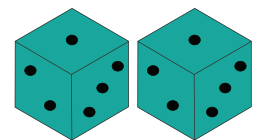
Members, please log in to download this worksheet.

Not a member? Please sign up to gain complete access.


[www.mathworksheets4kids.com](http://www.mathworksheets4kids.com)

11) Andrea has 5 dice. She removes 2 dice. How many dice are left?

her cousins who are playing. How many dice are left?



12) Ramona has 5 gold fish in her aquarium. She removes two of them and places them in a fish bowl. How many fish remain in the aquarium?



**Answer key****Subtraction**

Horizontal 0-5: T2S1

1)  $5 - 2 = 3$

2)  $2 - 0 = 2$

3)  $3 - 3 = 0$

4)  $5 - 1 = 4$

5)  $1 -$

$- 3 = 1$

7)  $4 -$

$- 1 = 0$

9)  $2 -$

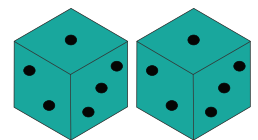
$- 0 = 3$

**PREVIEW**

Gain complete access to the largest collection of worksheets in all subjects!

Members, please log in to download this worksheet.

Not a member? Please sign up to gain complete access.

[www.mathworksheets4kids.com](http://www.mathworksheets4kids.com)11) Andrea has 5  
are playing  
Andrea lefther cousins who  
rs of dice is**1 pair of dice**

12) Ramona has 5 gold fish in her aquarium. She removes two of them and places them in a fish bowl. How many fish remain in the aquarium?

**3 fish**