

# Subtraction

No regrouping: T2S2

$$\begin{array}{r} 1) \quad 579 \\ - \quad 54 \\ \hline \end{array}$$

$$\begin{array}{r} 2) \quad 893 \\ - \quad 70 \\ \hline \end{array}$$

$$\begin{array}{r} 3) \quad 448 \\ - \quad 16 \\ \hline \end{array}$$

$$\begin{array}{r} 4) \quad 186 \\ - \quad 82 \\ \hline \end{array}$$

$$\begin{array}{r} 5) \quad 791 \\ - \quad 80 \\ \hline \end{array}$$

$$6) \quad 278$$

$$7) \quad 996$$

$$\begin{array}{r} 8) \quad 669 \\ - \quad 26 \\ \hline \end{array}$$

$$\begin{array}{r} 9) \quad 358 \\ - \quad 32 \\ \hline \end{array}$$

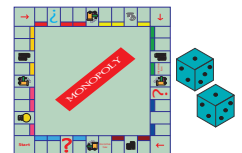
Gain complete access to the largest  
collection of worksheets in all subjects!

$$\begin{array}{r} 12) \quad 874 \\ - \quad 64 \\ \hline \end{array}$$

Members, please  
log in to  
download this  
worksheet.

Not a member?  
Please sign up to  
gain complete  
access.

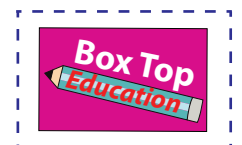
[www.mathworksheets4kids.com](http://www.mathworksheets4kids.com)



- 13) Sam and Mo  
roll of the di  
Mo \$76 as re

has \$689. On the  
. If he has to pay

- 14) Grade 1 students collected a total of 197 boxtop coupons. Students of Grade 4 collected 24 of them. How many more coupons did students of Grade 1 collect than students of Grade 4?



**Answer key****Subtraction**

No regrouping: T2S2

$$\begin{array}{r} 1) \quad 579 \\ - \quad 54 \\ \hline \quad 525 \end{array}$$

$$\begin{array}{r} 2) \quad 893 \\ - \quad 70 \\ \hline \quad 823 \end{array}$$

$$\begin{array}{r} 3) \quad 448 \\ - \quad 16 \\ \hline \quad 432 \end{array}$$

$$\begin{array}{r} 4) \quad 186 \\ - \quad 82 \\ \hline \quad 104 \end{array}$$

$$\begin{array}{r} 5) \quad 791 \\ - \quad 80 \\ \hline \quad 711 \end{array}$$

$$6) \quad 278$$

$$7) \quad 996$$

$$\begin{array}{r} 8) \quad 669 \\ - \quad 26 \\ \hline \quad 643 \end{array}$$

$$\begin{array}{r} 9) \quad 358 \\ - \quad 32 \\ \hline \quad 326 \end{array}$$

**PREVIEW**

Gain complete access to the largest collection of worksheets in all subjects!

Members, please log in to download this worksheet.

Not a member? Please sign up to gain complete access.

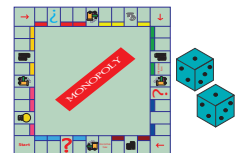
[www.mathworksheets4kids.com](http://www.mathworksheets4kids.com)

$$\begin{array}{r} 12) \quad 874 \\ - \quad 64 \\ \hline \quad 810 \end{array}$$

- 13) Sam and Mo had a roll of the dice. Mo had \$76 as he

has \$689. On the roll of the dice, Mo had \$76 as he

**Sam has \$613 left with him**



- 14) Grade 1 students collected a total of 197 boxtop coupons. Students of Grade 4 collected 24 of them. How many more coupons did students of Grade 1 collect than students of Grade 4?

**They collected 173 more coupons than students of Grade 4**

