


Subtraction

Sheet 1



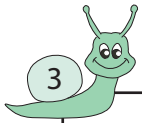
Circle the 2 numbers whose difference is 178

434 291 256 514



Circle the 2 numbers whose difference is 436

179 683 247 264



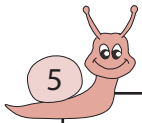
Circle the 2 numbers wh

17 817



bers whose difference is 937

4 61 998



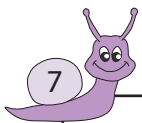
Circle the 2 numbers wh

545 535



bers whose difference is 578

53 134 41



Circle the 2 numbers wh

842 89 851 93



bers whose difference is 319

281 244 563 484



Circle the 2 numbers whose difference is 677

176 189 833 866



Circle the 2 numbers whose difference is 889

97 978 92 986

PREVIEW

Gain complete access to the largest
collection of worksheets in all subjects!


Members, please
log in to
download this
worksheet.

Not a member?
Please sign up to
gain complete
access.

www.mathworksheets4kids.com

Answer key**Subtraction**

Sheet 1



Circle the 2 numbers whose difference is 178

434

291

256

514



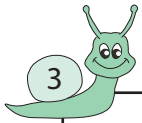
Circle the 2 numbers whose difference is 436

179

683

247

264



Circle the 2 numbers wh

17

817

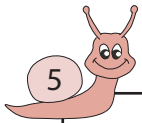


bers whose difference is 937

4

61

998



Circle the 2 numbers wh

545

535

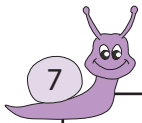


bers whose difference is 578

53

134

41



Circle the 2 numbers wh

842

89

851

93



bers whose difference is 319

281

244

563

484



Circle the 2 numbers whose difference is 677

176

189

833

866



Circle the 2 numbers whose difference is 889

97

978

92

986

PREVIEW

Gain complete access to the largest collection of worksheets in all subjects!

Members, please log in to download this worksheet.

Not a member? Please sign up to gain complete access.

www.mathworksheets4kids.com