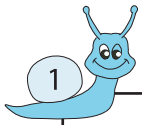


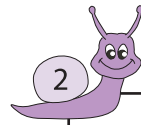
# Subtraction

Sheet 2




Circle the 2 numbers whose difference is 532

67      599      861      243



Circle the 2 numbers whose difference is 865

71      89      74      939



Circle the 2 numbers wh

543      217

# PREVIEW

Gain complete access to the largest  
collection of worksheets in all subjects!

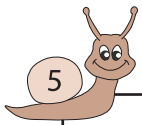
Members, please  
log in to  
download this  
worksheet.

Not a member?  
Please sign up to  
gain complete  
access.

[www.mathworksheets4kids.com](http://www.mathworksheets4kids.com)

bers whose difference is 667

33      829      308

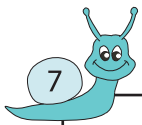


Circle the 2 numbers wh

775      57

bers whose difference is 186

53      253      267



Circle the 2 numbers wh

163      423      159      136      490      583      81      179

bers whose difference is 409



Circle the 2 numbers whose difference is 923

65      981      988      985



Circle the 2 numbers whose difference is 236

386      159      395      183