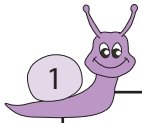


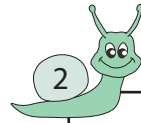
# Subtraction

Sheet 3



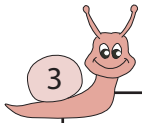
Circle the 2 numbers whose difference is 264

491      233      487      227



Circle the 2 numbers whose difference is 625

321      718      93      307



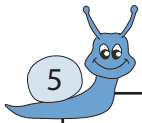
Circle the 2 numbers wh

216      945



bers whose difference is 154

34      67      221




Circle the 2 numbers wh

85      624



bers whose difference is 390

55      645      285



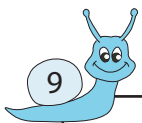
Circle the 2 numbers wh

386      369      233      222



bers whose difference is 915

75      64      76      991



Circle the 2 numbers whose difference is 813

962      154      967      959



Circle the 2 numbers whose difference is 441

639      209      198      610

# PREVIEW

Gain complete access to the largest  
collection of worksheets in all subjects!

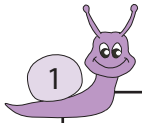
Members, please  
log in to  
download this  
worksheet.

Not a member?  
Please sign up to  
gain complete  
access.

[www.mathworksheets4kids.com](http://www.mathworksheets4kids.com)

**Answer key****Subtraction**

Sheet 3



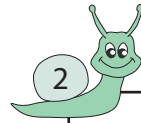
Circle the 2 numbers whose difference is 264

491

233

487

227



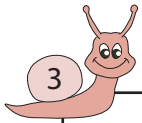
Circle the 2 numbers whose difference is 625

321

718

93

307



Circle the 2 numbers wh

216

945

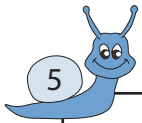


bers whose difference is 154

34

67

221



Circle the 2 numbers wh

85

624




bers whose difference is 390

55

645

285



Circle the 2 numbers wh

386

369

233

222



bers whose difference is 915

75

64

76

991



Circle the 2 numbers whose difference is 813

962

154

967

959



Circle the 2 numbers whose difference is 441

639

209

198

610

**PREVIEW**Gain complete access to the largest  
collection of worksheets in all subjects!Members, please  
log in to  
download this  
worksheet.Not a member?  
Please sign up to  
gain complete  
access.[www.mathworksheets4kids.com](http://www.mathworksheets4kids.com)