

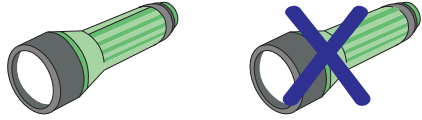
Name : _____

Score : _____

Cross out & Count


Subtraction within 5: S1

1)




$$\begin{array}{r} 2 \\ - 1 \\ \hline \end{array}$$

2)



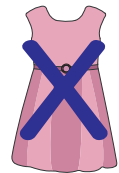
$$\begin{array}{r} 5 \\ - 3 \\ \hline \end{array}$$

3)



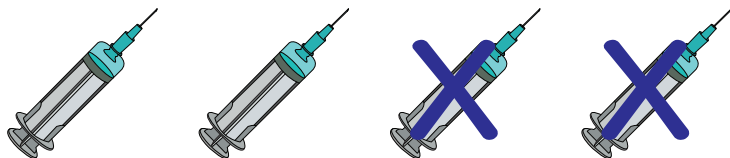
$$\begin{array}{r} 3 \\ - 2 \\ \hline \end{array}$$

4)




$$\begin{array}{r} 1 \\ - 1 \\ \hline \end{array}$$

5)



$$\begin{array}{r} 4 \\ - 2 \\ \hline \end{array}$$

6)



$$\begin{array}{r} 5 \\ - 1 \\ \hline \end{array}$$

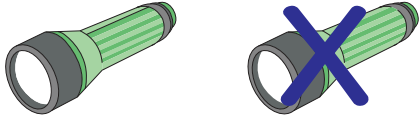
Name : _____

Score : _____

Answer key**Cross out & Count**


Subtraction within 5: S1

1)




$$\begin{array}{r} 2 \\ - 1 \\ \hline 1 \end{array}$$

2)



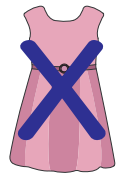
$$\begin{array}{r} 5 \\ - 3 \\ \hline 2 \end{array}$$

3)



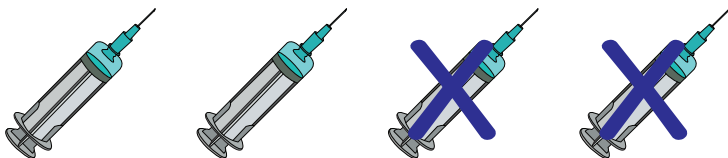
$$\begin{array}{r} 3 \\ - 2 \\ \hline 1 \end{array}$$

4)




$$\begin{array}{r} 1 \\ - 1 \\ \hline 0 \end{array}$$

5)



$$\begin{array}{r} 4 \\ - 2 \\ \hline 2 \end{array}$$

6)



$$\begin{array}{r} 5 \\ - 1 \\ \hline 4 \end{array}$$