


Cross out & Count

Subtraction within 5: S2

1)



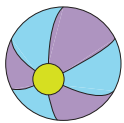
$$\begin{array}{r} 3 \\ - 3 \\ \hline \end{array}$$

2)



$$\begin{array}{r} 5 \\ - 2 \\ \hline \end{array}$$

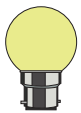
3)



Gain complete access to the largest
collection of worksheets in all subjects!

$$\begin{array}{r} 4 \\ - 3 \\ \hline \end{array}$$

4)



Members, please
log in to
download this
worksheet.

Not a member?
Please sign up to
gain complete
access.


$$\begin{array}{r} 3 \\ - 1 \\ \hline \end{array}$$

5)



$$\begin{array}{r} 5 \\ - 4 \\ \hline \end{array}$$

6)



$$\begin{array}{r} 4 \\ - 1 \\ \hline \end{array}$$