

Cross out & Count


Subtraction within 5: S3

1)



$$\begin{array}{r} 4 \\ - 2 \\ \hline \end{array}$$

2)



$$\begin{array}{r} 2 \\ - 1 \\ \hline \end{array}$$

3)



PREVIEW

Gain complete access to the largest
collection of worksheets in all subjects!

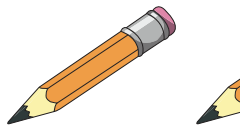
Members, please
log in to
download this
worksheet.

Not a member?
Please sign up to
gain complete
access.

www.mathworksheets4kids.com

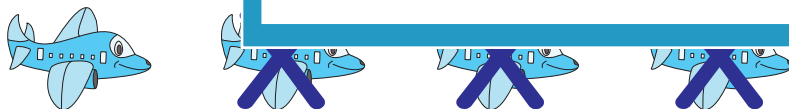
$$\begin{array}{r} 3 \\ - 1 \\ \hline \end{array}$$

4)



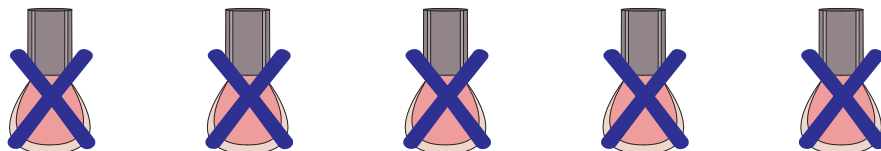
$$\begin{array}{r} 5 \\ - 2 \\ \hline \end{array}$$

5)



$$\begin{array}{r} 4 \\ - 3 \\ \hline \end{array}$$

6)



$$\begin{array}{r} 5 \\ - 5 \\ \hline \end{array}$$