


Name : _____

Score : _____

Cross out & Count


Subtraction within 20: S3

1)



$$\begin{array}{r} 13 \\ - 10 \\ \hline \end{array}$$

2)



PREVIEW

Gain complete access to the largest collection of worksheets in all subjects!

Members, please log in to download this worksheet.

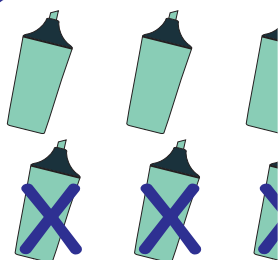
Not a member? Please sign up to gain complete access.

www.mathworksheets4kids.com




$$\begin{array}{r} 8 \\ - 7 \\ \hline \end{array}$$

3)




$$\begin{array}{r} 18 \\ - 11 \\ \hline \end{array}$$

4)



$$\begin{array}{r} 12 \\ - 6 \\ \hline \end{array}$$

5)



$$\begin{array}{r} 16 \\ - 1 \\ \hline \end{array}$$