



Cross out & Count

Subtraction within 10: S1


Complete the subtraction sentences that represent the picture models.




$6 - 3 = \underline{\quad}$



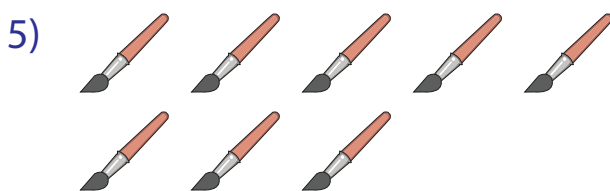
$9 - 5 = \underline{\quad}$




$4 - 1 = \underline{\quad}$




$7 - 7 = \underline{\quad}$




$8 - 6 = \underline{\quad}$



$10 - 9 = \underline{\quad}$



$10 - 4 = \underline{\quad}$




$5 - 2 = \underline{\quad}$


Cross out & Count

Subtraction within 10: S1


Complete the subtraction sentences that represent the picture models.




$$6 - 3 = \underline{3}$$




$$9 - 5 = \underline{4}$$



$$4 - 1 = \underline{3}$$




$$7 - 7 = \underline{0}$$




$$8 - 6 = \underline{2}$$



$$10 - 9 = \underline{1}$$



$$10 - 4 = \underline{6}$$



$$5 - 2 = \underline{3}$$