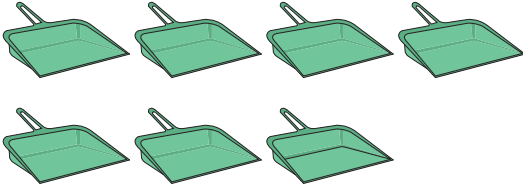



Cross out & Count

Subtraction within 10: S2

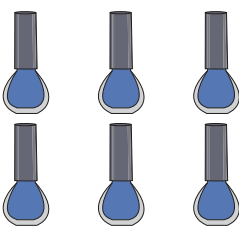
Complete the subtraction sentences that represent the picture models.

1) 

$$7 - 4 = \underline{\quad}$$

2) 

$$10 - 1 = \underline{\quad}$$

3) 

$$9 - 2 = \underline{\quad}$$


PREVIEW

Gain complete access to the largest collection of worksheets in all subjects!


Members, please log in to download this worksheet.

Not a member? Please sign up to gain complete access.


www.mathworksheets4kids.com




$$= \underline{\quad}$$

5) 


$$2 - 1 = \underline{\quad}$$



$$= \underline{\quad}$$

7) 

$$8 - 5 = \underline{\quad}$$

8) 

$$4 - 3 = \underline{\quad}$$