


Cross out & Count

Subtraction within 10: S1

1) Cross out 9 light bulbs.




How many remain? _____

2) Cross out 2 caps.



How many are left? _____

3) Cross out 4 beets.



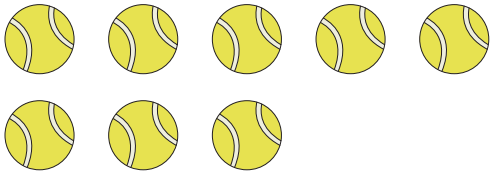
How many remain? _____

4) Cross out 1 donut.



How many are left? _____

5) Cross out 7 tennis balls.



How many remain? _____

6) Cross out 5 candles.




How many remain? _____

7) Cross out 1 butterfly.



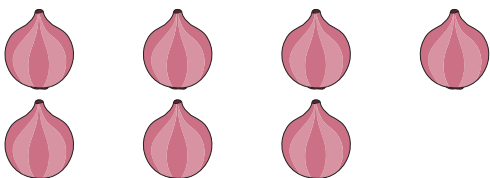
How many are left? _____

8) Cross out 4 tiaras.




How many are left? _____

9) Cross out 5 onions.



How many are left? _____

10) Cross out 2 rocking horses.

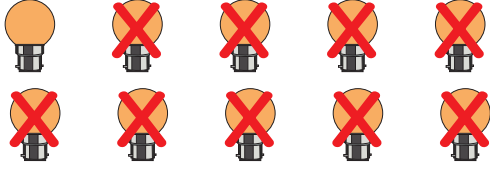


How many remain? _____

Cross out & Count

Subtraction within 10: S1


1) Cross out 9 light bulbs.

How many remain? 1

2) Cross out 2 caps.

How many are left? 1

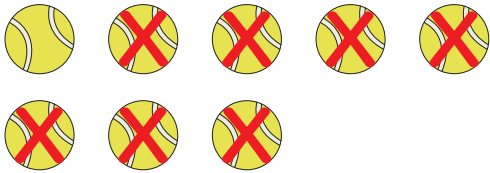
3) Cross out 4 beets.

How many remain? 2

4) Cross out 1 donut.

How many are left? 3


5) Cross out 7 tennis balls.

How many remain? 1

6) Cross out 5 candles.

How many remain? 1

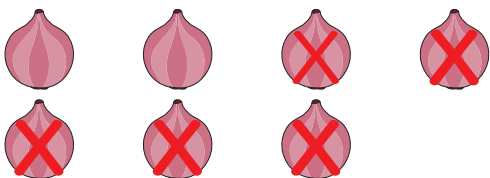
7) Cross out 1 butterfly.

How many are left? 4


8) Cross out 4 tiaras.

How many are left? 5

9) Cross out 5 onions.

How many are left? 2

10) Cross out 2 rocking horses.

How many remain? 3