

# Cross out & Count


Subtraction within 10: S2

1) Cross out 2 gift boxes.




How many are left? \_\_\_\_\_

2) Cross out 6 rugby balls.



How many remain? \_\_\_\_\_

3) Cross out 5 mangoes.



How many remain? \_\_\_\_\_

4) Cross out 3 padlocks.



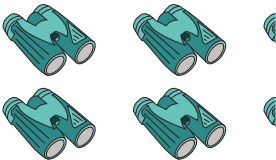
How many are left? \_\_\_\_\_

5) Cross out 1 crab.




How many are left? \_\_\_\_\_

7) Cross out 3 binoculars.



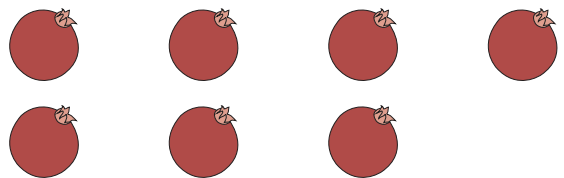
How many remain? \_\_\_\_\_

9) Cross out 6 toy dinosaurs.



How many are left? \_\_\_\_\_

10) Cross out 4 pomegranates.



How many remain? \_\_\_\_\_

## PREVIEW

Gain complete access to the largest collection of worksheets in all subjects!

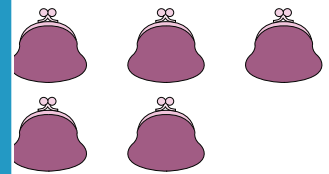
Members, please log in to download this worksheet.

Not a member? Please sign up to gain complete access.

www.mathworksheets4kids.com

How many are left? \_\_\_\_\_

How many are left? \_\_\_\_\_



How many are left? \_\_\_\_\_

How many are left? \_\_\_\_\_

