


Cross out & Count

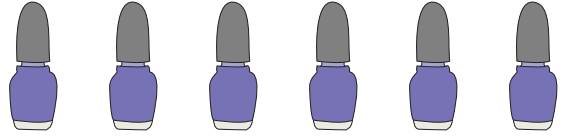
Subtraction within 10: S3

1) Cross out 7 buttons.




How many remain? _____

2) Cross out 2 bottles of nail polish.



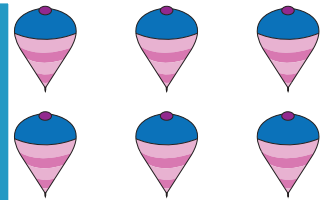
How many are left? _____

3) Cross out 2 piggy banks.



How many are left? _____

4) Cross out 5 spinning tops.



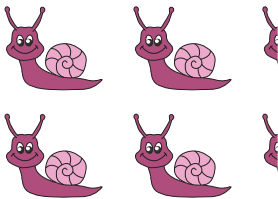
How many are left? _____

5) Cross out 3 coffee mugs.



How many remain? _____

7) Cross out 6 snails.




How many are left? _____

9) Cross out 4 eggplants.



How many remain? _____

10) Cross out 8 urns.



How many are left? _____

PREVIEW

Gain complete access to the largest collection of worksheets in all subjects!

Members, please log in to download this worksheet.

Not a member? Please sign up to gain complete access.

www.mathworksheets4kids.com

How many are left? _____

How many are left? _____

How many are left? _____



How many remain? _____