


Cross out & Count


Subtraction within 20: 51

- 1) Cross out 1 decorative Christmas bulb.

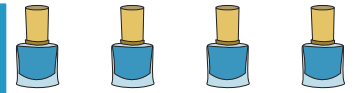


How many remain? _____


- 2) Cross out 8 bottles of nail polish.



How many are left? _____



- 3) Cross out 4 frogs.



How many remain? _____



- 4) Cross out 6 sippies.



How many are left? _____



- 5) Cross out 10 bottles of glue.



How many remain? _____

PREVIEW

Gain complete access to the largest collection of worksheets in all subjects!

Members, please log in to download this worksheet.

Not a member? Please sign up to gain complete access.

www.mathworksheets4kids.com