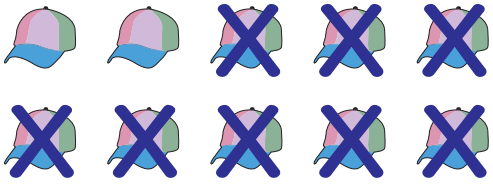
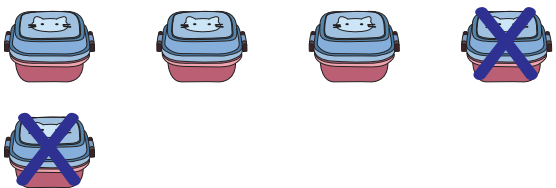



Picture Subtraction

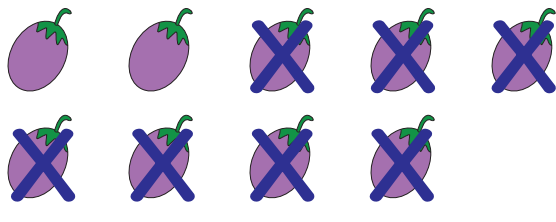
Subtraction within 10: S1


Write the subtraction sentence to represent each picture model.


1) 
 _____ - _____ = _____

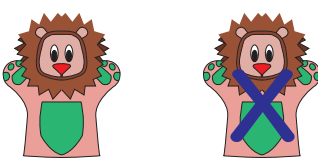
2) 
 _____ - _____ = _____

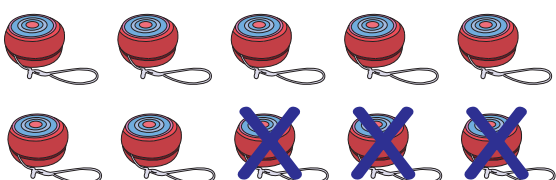
3) 
 _____ - _____ = _____

4) 
 _____ - _____ = _____

5) 
 _____ - _____ = _____

6) 
 _____ - _____ = _____

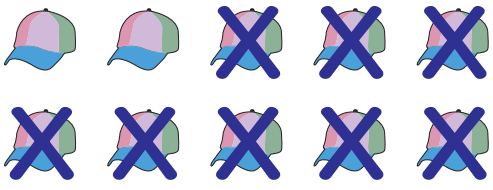
7) 
 _____ - _____ = _____

8) 
 _____ - _____ = _____

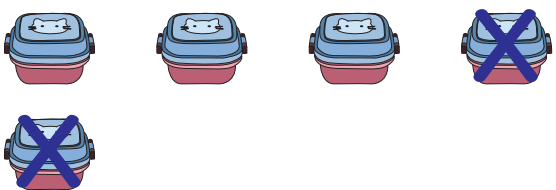
Picture Subtraction

Subtraction within 10: S1


Write the subtraction sentence to represent each picture model.

1) 

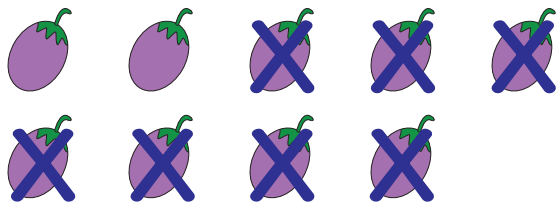
$$\underline{10} - \underline{8} = \underline{2}$$

2) 


$$\underline{5} - \underline{2} = \underline{3}$$

3) 


$$\underline{7} - \underline{3} = \underline{4}$$

4) 

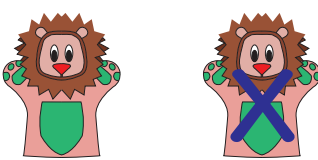
$$\underline{9} - \underline{7} = \underline{2}$$

5) 

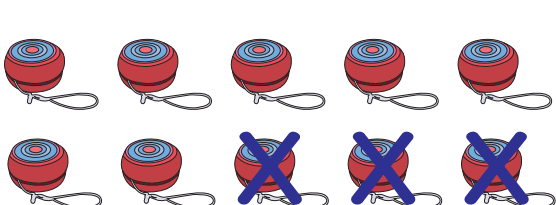
$$\underline{9} - \underline{6} = \underline{3}$$

6) 

$$\underline{6} - \underline{1} = \underline{5}$$

7) 

$$\underline{2} - \underline{1} = \underline{1}$$

8) 

$$\underline{10} - \underline{3} = \underline{7}$$