




Picture Subtraction

Subtraction within 10: S2

Write the subtraction sentence to represent each picture model.

1) 
 _____ - _____ = _____

2) 
 _____ - _____ = _____

3) 
 _____ - _____ = _____

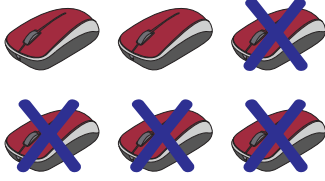
PREVIEW

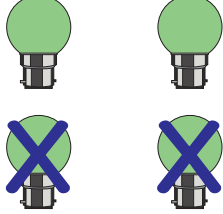
Gain complete access to the largest collection of worksheets in all subjects!

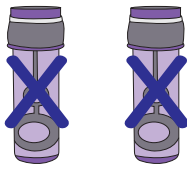
Members, please log in to download this worksheet.


Not a member? Please sign up to gain complete access.

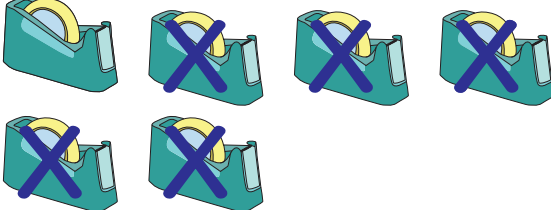
www.mathworksheets4kids.com


 _____ - _____ = _____

5) 
 _____ - _____ = _____


 _____ - _____ = _____

7) 
 _____ - _____ = _____

8) 
 _____ - _____ = _____