


Dice Subtraction



Sheet 1

Count the dots displayed on each pair of dice. Write the difference in the boxes given below.

1)  -  =

2)  -  =

3)  -  =

4)  -  =

5)  -  =

6)  -  =

7)  -  =

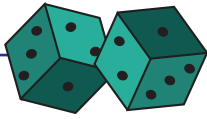
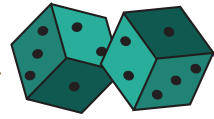
8)  -  =

9)  -  =

10)  -  =

11)  -  =

12)  -  =

Answer key**Dice Subtraction**

Sheet 1

Count the dots displayed on each pair of dice. Write the difference in the boxes given below.

1)  -  =

2)  -  =

3)  -  =

4)  -  =

5)  -  =

6)  -  =

7)  -  =

8)  -  =

9)  -  =

10)  -  =

11)  -  =

12)  -  =