




Picture Subtraction - MCQ


Sheet 1

A) Observe each picture model and identify the correct subtraction sentence.




1) 
 a) $10 - 9 = 1$ b) $10 - 3 = 7$ c) $10 - 6 = 4$




2) 
 a) $7 - 6 = 1$ b) $7 - 4 = 3$ c) $7 - 1 = 6$




3) 
 a) $9 - 6 = 3$ b) $9 - 1 = 8$ c) $9 - 5 = 4$




4) 
 a) $6 - 4 = 2$ b) $6 - 3 = 3$ c) $6 - 1 = 5$

B) Choose the correct picture model that best suits each subtraction sentence.

1) $6 - 1 = 5$
 a) 
 b) 
 c) 

2) $4 - 2 = 2$
 a) 
 b) 
 c) 


3) $5 - 4 = 1$
 a) 
 b) 
 c) 


4) $7 - 6 = 1$
 a) 
 b) 
 c) 


Picture Subtraction - MCQ


Sheet 1

A) Observe each picture model and identify the correct subtraction sentence.




1) 
 a) ~~10 - 9 = 1~~ b) 10 - 3 = 7 c) 10 - 6 = 4




2) 
 a) 7 - 6 = 1 b) 7 - 4 = 3 c) ~~7 - 1 = 6~~




3) 
 a) ~~9 - 6 = 3~~ b) 9 - 1 = 8 c) 9 - 5 = 4




4) 
 a) 6 - 4 = 2 b) ~~6 - 3 = 3~~ c) 6 - 1 = 5

B) Choose the correct picture model that best suits each subtraction sentence.

1) $6 - 1 = 5$
 a) 
 b) ~~~~
 c) 

2) $4 - 2 = 2$
 a) ~~~~
 b) 
 c) 

3) $5 - 4 = 1$
 a) ~~~~
 b) 
 c) 

4) $7 - 6 = 1$
 a) 
 b) 
 c) ~~~~