


Picture Subtraction - MCQ

A) Observe each picture model and identify the correct subtraction sentence.

1)  a) $7 - 2 = 5$ b) $7 - 4 = 3$ c) $7 - 3 = 4$

2)  a) $9 - 5 = 4$ = 8

3)  a) $5 - 3 = 2$ = 4

4)  a) $10 - 1 = 9$ = 2

B) Choose the correct subtraction sentence.

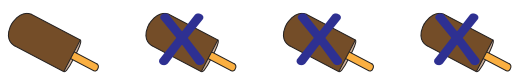

1) $7 - 5 = 2$



a)  



b)  

c)  c) 

3) $4 - 3 = 1$ 4) $6 - 4 = 2$

a)  a) 

b)  b) 

c)  c) 

PREVIEW

Gain complete access to the largest collection of worksheets in all subjects!

Members, please log in to download this worksheet.

Not a member? Please sign up to gain complete access.

www.mathworksheets4kids.com