


Picture Subtraction - MCQ

A) Observe each picture model and identify the correct subtraction sentence.

1) 
 a) $8 - 4 = 4$ b) $8 - 1 = 7$ c) $8 - 3 = 5$

2) 
 a) $10 - 6 = 4$ $2 = 8$

3) 
 a) $7 - 5 = 2$ $= 3$

4) 
 a) $9 - 2 = 7$ $= 4$

PREVIEW

Gain complete access to the largest collection of worksheets in all subjects!






Members, please log in to download this worksheet.

Not a member? Please sign up to gain complete access.

www.mathworksheets4kids.com

B) Choose the correct

1) $5 - 3 = 2$
 a)  
 b)  
 c)  c) 

3) $7 - 2 = 5$ 4) $4 - 1 = 3$
 a)  a) 
 b)  b) 
 c)  c) 