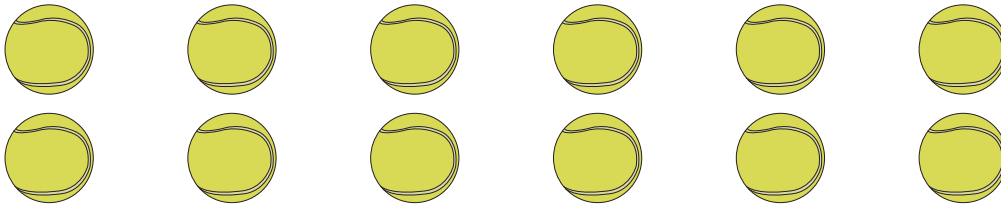


Picture Subtraction

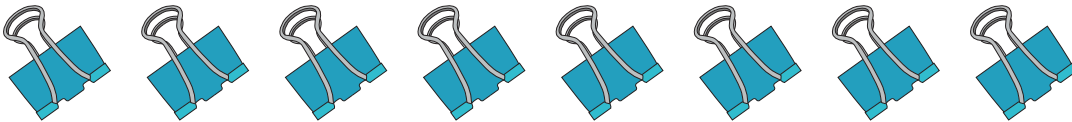
Fact 1-10: S1

- 1) Cross out 8 tennis balls. How many are left?



$$12 - 8 = \underline{\quad}$$

- 2) Cross out 3 binder clips. How many are left?




$$8 - 3 = \underline{\quad}$$

- 3) Cross out 1 pinwheel. How many are left?




$$3 - 1 = \underline{\quad}$$

- 4) Cross out 7 candles. How many are left?



$$13 - 7 = \underline{\quad}$$

- 5) Cross out 2 bottle gourds. How many are left?

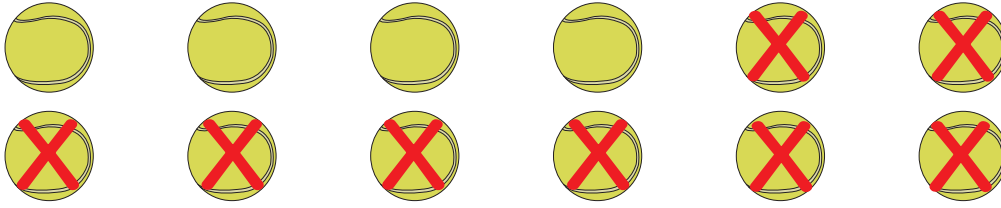


$$9 - 2 = \underline{\quad}$$

Picture Subtraction

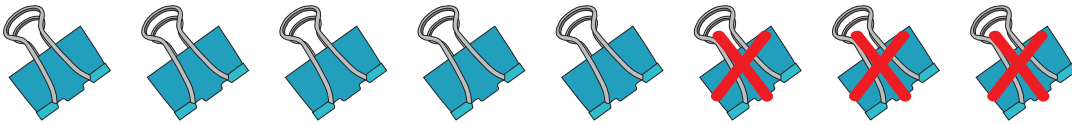
Fact 1-10: S1

- 1) Cross out 8 tennis balls. How many are left?



$$12 - 8 = \underline{4}$$

- 2) Cross out 3 binder clips. How many are left?



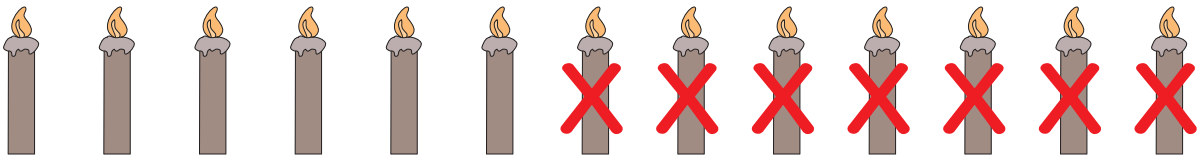
$$8 - 3 = \underline{5}$$

- 3) Cross out 1 pinwheel. How many are left?



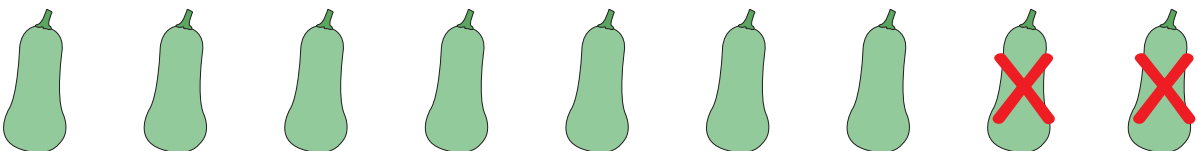
$$3 - 1 = \underline{2}$$

- 4) Cross out 7 candles. How many are left?



$$13 - 7 = \underline{6}$$

- 5) Cross out 2 bottle gourds. How many are left?



$$9 - 2 = \underline{7}$$