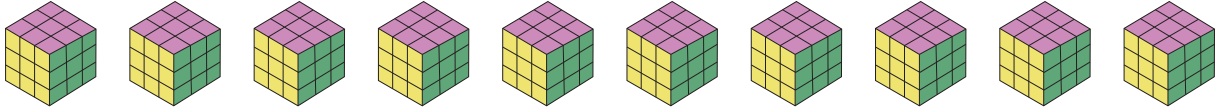


**Picture Subtraction**


Fact 1-5: S1

- 1) Cross out 5 Rubik's cubes. How many are left?



$$10 - 5 = \underline{\quad}$$

- 2) Cross out 2 Russian dolls. How many are left?



$$6 - 2 = \underline{\quad}$$

- 3) Cross out 1 toy helicopter. How many are left?



$$3 - 1 = \underline{\quad}$$

- 4) Cross out 4 ice-cream cones. How many are left?



$$7 - 4 = \underline{\quad}$$

- 5) Cross out 3 whistles. How many are left?

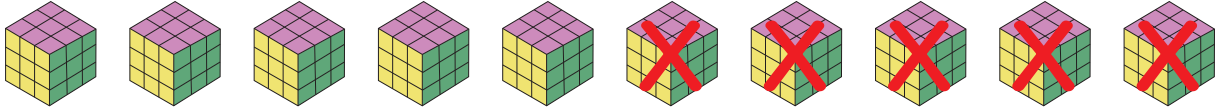


$$9 - 3 = \underline{\quad}$$

**Picture Subtraction**


Fact 1-5: S1

- 1) Cross out 5 Rubik's cubes. How many are left?



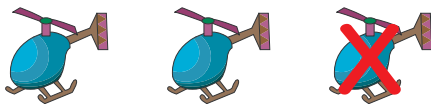
$$10 - 5 = \underline{5}$$

- 2) Cross out 2 Russian dolls. How many are left?



$$6 - 2 = \underline{4}$$

- 3) Cross out 1 toy helicopter. How many are left?



$$3 - 1 = \underline{2}$$

- 4) Cross out 4 ice-cream cones. How many are left?



$$7 - 4 = \underline{3}$$

- 5) Cross out 3 whistles. How many are left?



$$9 - 3 = \underline{6}$$