

Picture Subtraction

Fact 1-5: S2

- 1) Cross out 4 mugs. How many are left?




$$9 - 4 = \underline{\quad}$$


- 2) Cross out 5 fish. How many are left?




$$7 - 5 = \underline{\quad}$$




- 3) Cross out 2 mangoes.



$$10 - 2 = \underline{\quad}$$

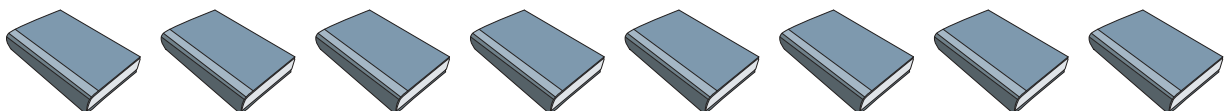


- 4) Cross out 3 watches.



$$6 - 3 = \underline{\quad}$$

- 5) Cross out 1 book. How many are left?



$$8 - 1 = \underline{\quad}$$

PREVIEW

Gain complete access to the largest collection of worksheets in all subjects!

Members, please log in to download this worksheet.

Not a member? Please sign up to gain complete access.

www.mathworksheets4kids.com