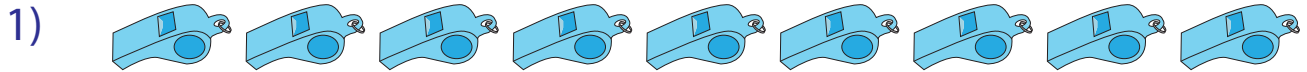



Picture Subtraction

Fact2: S3


Cross out two items from each set given below. How many are left?



$$9 - 2 = \underline{\quad}$$



$$3 - 2 = \underline{\quad}$$



$$6 - 2 = \underline{\quad}$$



$$10 - 2 = \underline{\quad}$$



$$5 - 2 = \underline{\quad}$$

PREVIEW

Gain complete access to the largest collection of worksheets in all subjects!

Members, please log in to download this worksheet.

Not a member? Please sign up to gain complete access.

www.mathworksheets4kids.com



$$7 - 2 = \underline{\quad}$$