

Picture Subtraction

Fact3: S1

Cross out three items from each set given below. How many are left?

1)



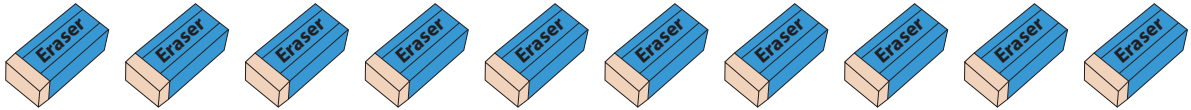
$$9 - 3 = \underline{\quad}$$

2)



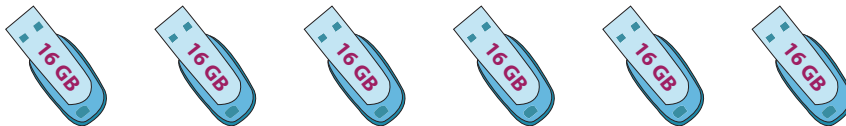
$$5 - 3 = \underline{\quad}$$

3)



$$10 - 3 = \underline{\quad}$$

4)



$$6 - 3 = \underline{\quad}$$

5)



$$4 - 3 = \underline{\quad}$$

6)





$$8 - 3 = \underline{\quad}$$

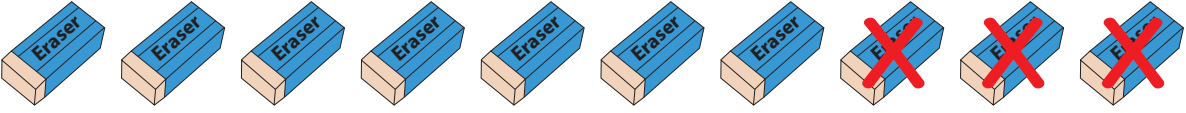
Picture Subtraction

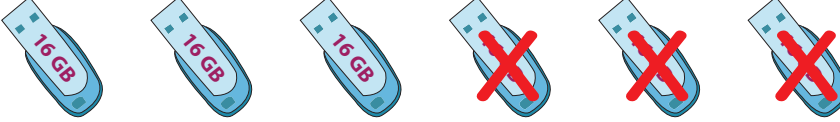
Fact3: S1


Cross out three items from each set given below. How many are left?


1)  $9 - 3 = \underline{6}$

2)  $5 - 3 = \underline{2}$

3)  $10 - 3 = \underline{7}$

4)  $6 - 3 = \underline{3}$

5)  $4 - 3 = \underline{1}$

6)  $8 - 3 = \underline{5}$