

Picture Subtraction

Fact5: S1

Cross out five items from each set given below. How many are left?



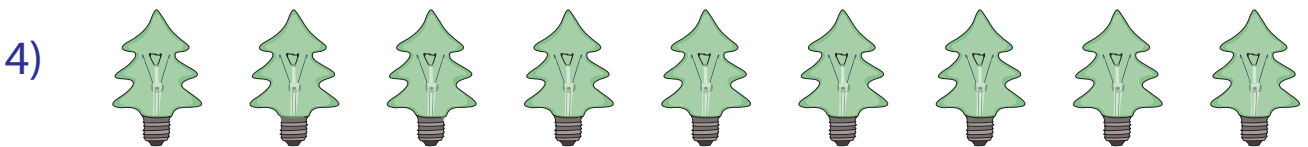
$$10 - 5 = \underline{\quad}$$



$$8 - 5 = \underline{\quad}$$




$$6 - 5 = \underline{\quad}$$



$$9 - 5 = \underline{\quad}$$



$$5 - 5 = \underline{\quad}$$



$$7 - 5 = \underline{\quad}$$

Picture Subtraction

Fact5: S1

Cross out five items from each set given below. How many are left?



$$10 - 5 = \underline{5}$$



$$8 - 5 = \underline{3}$$



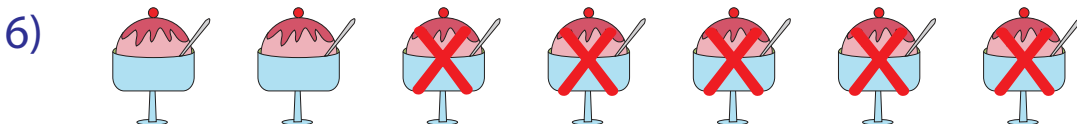
$$6 - 5 = \underline{1}$$



$$9 - 5 = \underline{4}$$



$$5 - 5 = \underline{0}$$



$$7 - 5 = \underline{2}$$