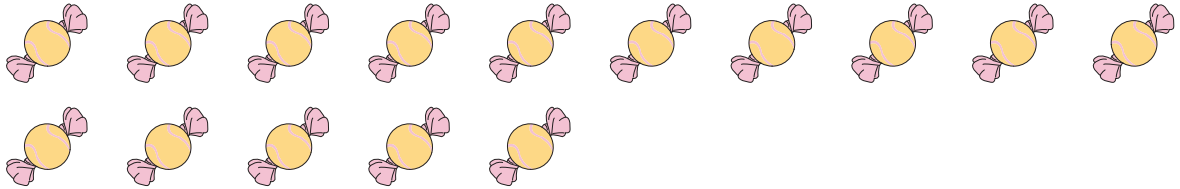


Picture Subtraction

Fact6: S2


Cross out six items from each set given below. How many are left?

1)



$$15 - 6 = \underline{\quad}$$

2)



$$12 -$$

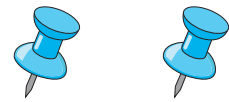
PREVIEW

Gain complete access to the largest collection of worksheets in all subjects!

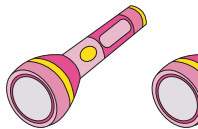
Members, please log in to download this worksheet.

Not a member? Please sign up to gain complete access.

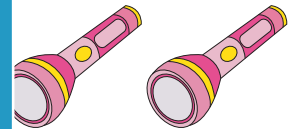
www.mathworksheets4kids.com



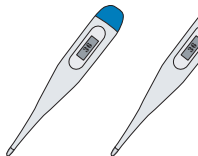
3)



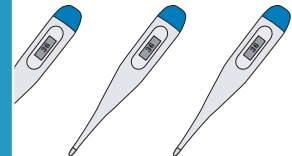
$$8 -$$




4)



$$11 - 6 = \underline{\quad}$$



5)



$$7 - 6 = \underline{\quad}$$