

Picture Subtraction

Fact7: S1


Cross out seven items from each set given below. How many are left?

1)



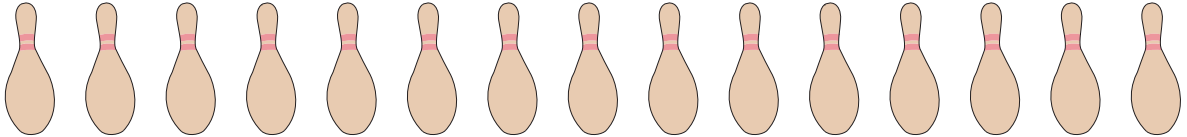
$$10 - 7 = \underline{\quad}$$

2)




$$13 - 7 = \underline{\quad}$$

3)



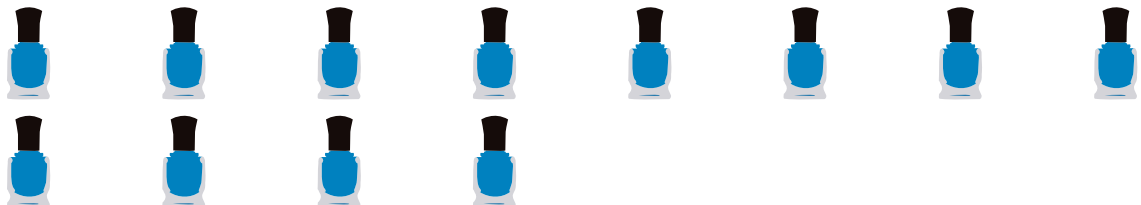
$$15 - 7 = \underline{\quad}$$

4)



$$8 - 7 = \underline{\quad}$$

5)



$$12 - 7 = \underline{\quad}$$

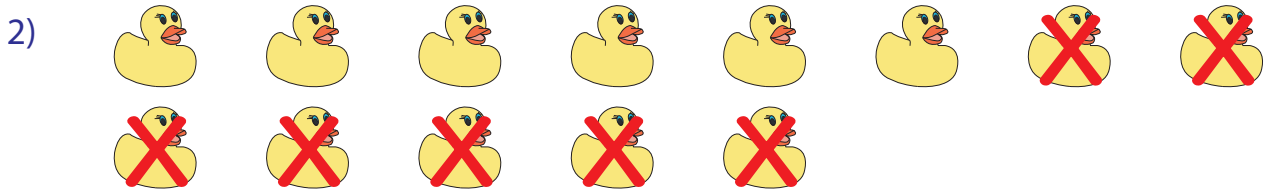
Picture Subtraction

Fact7: S1

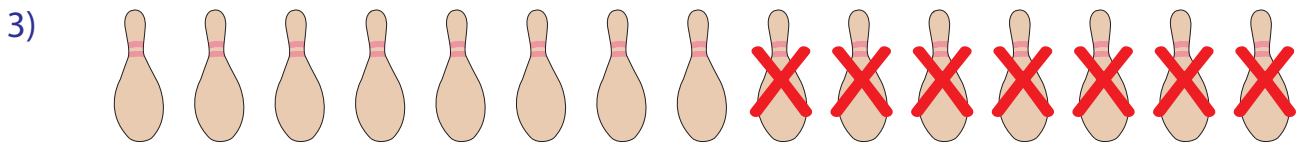
Cross out seven items from each set given below. How many are left?



$$10 - 7 = \underline{3}$$



$$13 - 7 = \underline{6}$$



$$15 - 7 = \underline{8}$$



$$8 - 7 = \underline{1}$$



$$12 - 7 = \underline{5}$$