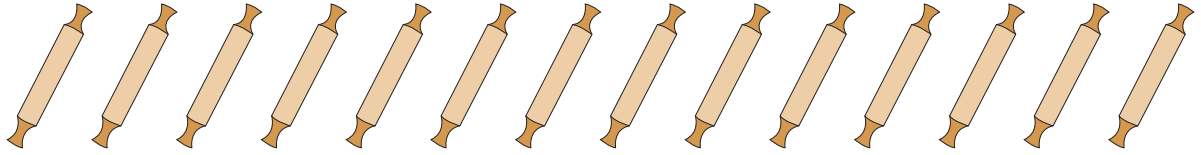


## Picture Subtraction

Fact7: S2

Cross out seven items from each set given below. How many are left?

1)





$$14 - 7 = \underline{\quad}$$

2)




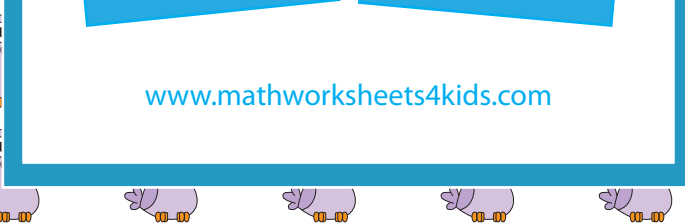

$$11 - \quad = \quad$$

3)



$$7 - \quad = \quad$$

4)



$$16 - 7 = \underline{\quad}$$

5)



$$9 - 7 = \underline{\quad}$$