

Picture Subtraction

Fact8: S1

Cross out eight items from each set given below. How many are left?

1)



$$11 - 8 = \underline{\quad}$$

2)



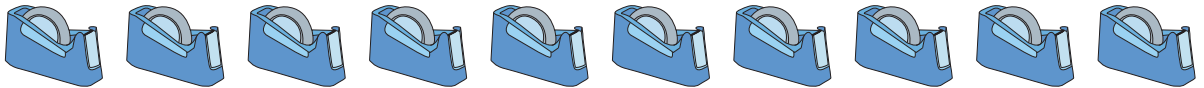
$$8 - 8 = \underline{\quad}$$

3)




$$14 - 8 = \underline{\quad}$$

4)



$$10 - 8 = \underline{\quad}$$

5)



$$15 - 8 = \underline{\quad}$$

Picture Subtraction

Fact8: S1


Cross out eight items from each set given below. How many are left?



$$11 - 8 = \underline{3}$$




$$8 - 8 = \underline{0}$$



$$14 - 8 = \underline{6}$$



$$10 - 8 = \underline{2}$$



$$15 - 8 = \underline{7}$$