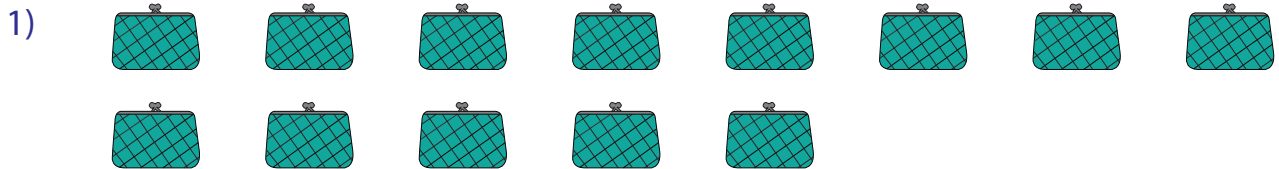



## Picture Subtraction

Fact9: S1

Cross out nine items from each set given below. How many are left?




$$13 - 9 = \underline{\quad}$$




$$9 - \quad = \quad$$



$$12 - \quad = \quad$$



$$15 - 9 = \underline{\quad}$$



$$10 - 9 = \underline{\quad}$$

# PREVIEW

Gain complete access to the largest collection of worksheets in all subjects!

Members, please log in to download this worksheet.

Not a member? Please sign up to gain complete access.

www.mathworksheets4kids.com