

Picture Subtraction

Fact9: S2

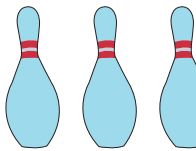
Cross out nine items from each set given below. How many are left?

1)



$$10 - 9 = \underline{\quad}$$

2)



$$16 -$$

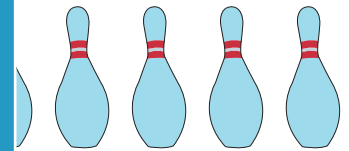
PREVIEW

Gain complete access to the largest
collection of worksheets in all subjects!


Members, please
log in to
download this
worksheet.

Not a member?
Please sign up to
gain complete
access.

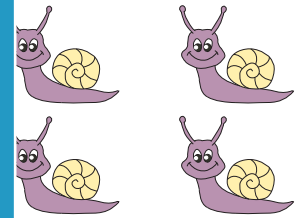
www.mathworksheets4kids.com



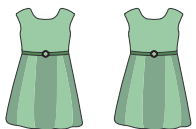
3)



$$14 -$$



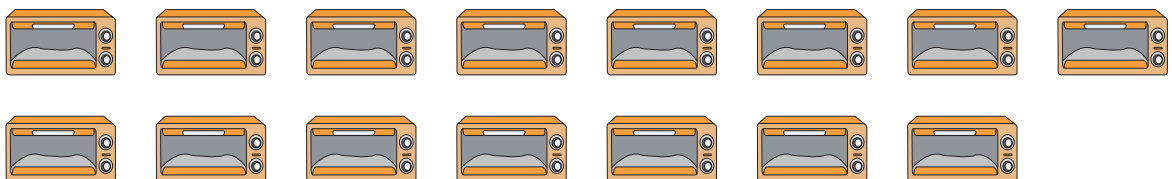
4)



$$11 - 9 = \underline{\quad}$$



5)



$$15 - 9 = \underline{\quad}$$