


Name : _____


2-Digit Subtraction

Regrouping: S1

- 1) The hare and the tortoise ran a race. The turtle took 33 minutes to cross the finish line. The hare completed the race in 19 minutes. Who won the race and by how many minutes?



- 2) Theresa and Alan went for trick or treat on Halloween. Theresa collected 42 candies in all. She gave away 23 to Alan. How many candies does Theresa have now?



- 3) As the final whistle blew, Team Russia scored 65 points and Team Canada scored 48. By how many points did Team Russia win?


Gain complete access to the largest collection of worksheets in all subjects!

Members, please log in to download this worksheet.

Not a member? Please sign up to gain complete access.



- 4) Hannah baked a batch of cookies for her neighbour. How many cookies did she have left?



- 5) Haroon has a collection of 91 toy cars. He gives away 27 of them to his little brother, Ryan. How many toy cars does Haroon have now?




Name : _____

Answer Key

2-Digit Subtraction


Regrouping: S1

- 1) The hare and the tortoise ran a race. The turtle took 33 minutes to cross the finish line. The hare completed the race in 19 minutes. Who won the race and by how many minutes?



The hare won the race by 14 minutes

- 2) Theresa and Alan went for trick or treat on Halloween. Theresa collected 42 candies in all. She gave away 23 to Alan. How many candies does Theresa have now?




- 3) As the final whistle blew, Team Russia scored 65 points and Team USA scored 48. How many more points did Team USA score than Team Russia?

Team USA won by 17 points

- 4) Hannah baked a batch of 48 cookies for her neighbour. How many cookies does she have left?

26 cookies

- 5) Haroon has a collection of 91 toy cars. He gives away 27 of them to his little brother, Ryan. How many toy cars does Haroon have now?



64 toy cars

PREVIEW

Gain complete access to the largest collection of worksheets in all subjects!

Members, please log in to download this worksheet.

Not a member? Please sign up to gain complete access.

www.mathworksheets4kids.com

- scored 65 points and Team USA scored 48. How many more points did Team USA score than Team Russia?



- 48 of them to a neighbour. How many cookies does she have left?

