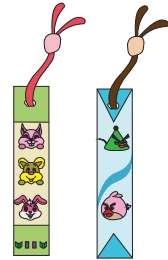


Name : _____


2-Digit Subtraction

Regrouping: S2

- 1) There is a total of 46 bookmarks in a shop. It manages to sell 37 of them by the end of the month. How many bookmarks remain unsold?



- 2) A store puts up 87 robots for sale on July 4th. It managed to sell 69 of them by end of the week. How many robots are there in the store?



- 3) Brendon owns a boat over after renting


Gain complete access to the largest collection of worksheets in all subjects!

Members, please log in to download this worksheet.

Not a member? Please sign up to gain complete access.

www.mathworksheets4kids.com

How many boats are left



- 4) Simon bought 50 Christmas cards. He used 19 of them for the Xmas

ed?



- 5) Fiona has 23 Easter eggs. Her friend, Valerie painted 15 of them yellow. How many Easter eggs remain to be painted?



Name : _____

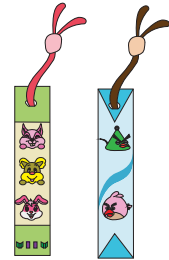
Answer Key

2-Digit Subtraction

Regrouping: S2


- 1) There is a total of 46 bookmarks in a shop. It manages to sell 37 of them by the end of the month. How many bookmarks remain unsold?

9 bookmarks



- 2) A store puts up 87 robots for sale on July 4th. It managed to sell 69 of them by end of the week. How many robots are there in the store?

18 robots



- 3) Brendon owns a boat and rents it out to other people. How many boats are left over after renting out 50 boats?


37 boats

Gain complete access to the largest collection of worksheets in all subjects!

Members, please log in to download this worksheet.

Not a member? Please sign up to gain complete access.

www.mathworksheets4kids.com



- 4) Simon bought 50 candy canes for Christmas. He used 19 of them for his friends. How many candy canes are left?

33 candy canes



- 5) Fiona has 23 Easter eggs. Her friend, Valerie painted 15 of them yellow. How many Easter eggs remain to be painted?

8 Easter eggs

