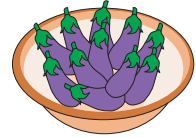


Name : _____

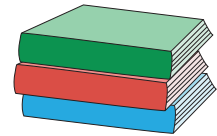
2-Digit Subtraction

Regrouping: 53

- 1) Ninety two pounds of eggplants were picked from a vegetable farm. 23 pounds were given away to the workers who picked them and the remaining was given to a supermarket. How many pounds of eggplants were given to the supermarket?



- 2) Fifty seven books were put up for sale at a three-day carnival. If 39 books were sold out, how many books remain unsold?



- 3) A store has 75 colored hats and 23 black hats. How many hats are there in total?

Gain complete access to the largest collection of worksheets in all subjects!

Members, please log in to download this worksheet.

Not a member? Please sign up to gain complete access.



- 4) Miss. Raina has 32 bouquets of flowers. She gives 15 bouquets to a class of 27 students. How many bouquets are left?

each to a class of



- 5) Thomas has 88 turkeys on his farm. He sells 59 of them for Thanksgiving. How many turkeys are left on the farm?



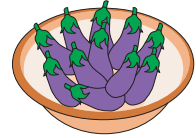
Name : _____

Answer Key

2-Digit Subtraction

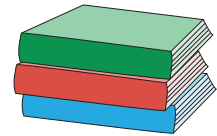
Regrouping: S3

- 1) Ninety two pounds of eggplants were picked from a vegetable farm. 23 pounds were given away to the workers who picked them and the remaining was given to a supermarket. How many pounds of eggplants were given to the supermarket?



69 pounds of eggplants

- 2) Fifty seven books were put up for sale at a three-day carnival. If 39 books were sold out, how many books remain unsold?



18 books

- 3) A store has 75 colored hats and 27 black hats. How many hats are there in total?

Gain complete access to the largest collection of worksheets in all subjects!

colored and the other



27 black hats

- 4) Miss. Raina has 37 goody bags. She gives 30 goody bags to a class of 27 students. How many goody bags are left?

Members, please log in to download this worksheet.

Not a member? Please sign up to gain complete access.

each to a class of



www.mathworksheets4kids.com

7 goody bags

- 5) Thomas has 88 turkeys on his farm. He sells 59 of them for Thanksgiving. How many turkeys are left on the farm?



29 turkeys