


Name : _____

3-Digit Subtraction

Sheet 1

- 1) A country veterinarian treats 218 animals in a month. He nurses pets and farm animals. If he treats 128 pets, how many farm animals does he treat in a month?



- 2) Jenna and Sarah are playing an online game. Jenna scored 544 points and Sarah scored 367 points. How many more points did Jenna score than Sarah?




- 3) Nicole bought a notebook and completed her assignment in 10 minutes. How many minutes did she spend on the assignment?

Gain complete access to the largest collection of worksheets in all subjects!


Members, please log in to download this worksheet.

Not a member? Please sign up to gain complete access.



- 4) Anne bought a bassinet for \$323. If she used a coupon worth \$50, how much did she pay for the bassinet?

www.mathworksheets4kids.com




- 5) Mike and Jack went to Virginia beach for parasailing. Mike's parasail wing rose up to 823 feet while Jack's rose up to 679 feet. How high did Mike parasail than Jack?



3-Digit Subtraction

- 1) A country veterinarian treats 218 animals in a month. He nurses pets and farm animals. If he treats 128 pets, how many farm animals does he treat in a month?

90 farm animals



- 2) Jenna and Sarah are playing an online game. Jenna scored 544 points and Sarah scored 367 points. How many more points did Jenna score than Sarah?

177 points



- 3) Nicole bought a blank notebook and completed her assignment in 10 minutes. How many blank pages were in the notebook?


95 blank pages

PREVIEW
Gain complete access to the largest collection of worksheets in all subjects!

Members, please log in to download this worksheet.


Not a member? Please sign up to gain complete access.

www.mathworksheets4kids.com



- 4) Anne bought a baby bassinet and used a coupon worth \$100. The original price was \$323. If she paid \$223, how much was the coupon worth?

\$59



- 5) Mike and Jack went to Virginia beach for parasailing. Mike's parasail wing rose up to 823 feet while Jack's rose up to 679 feet. How high did Mike parasail than Jack?

144 feet

