


Name : _____


Subtraction

3-digit & 2-digit: S1

- 1) A farmer planted potatoes in 132 rows and carrots in 15 rows. How many more rows of potatoes have been planted than carrots?



- 2) Rhea has 324 postage stamps in her stamp collection while Rhone collected 88 of them. How many more stamps does Rhea have than Rhone?



- 3) West Point Primary School has 120 students. If 45 students are dropped off by the bus and 30 students use the bus to go to school, how many students are left at school? How many students are left at school?

Gain complete access to the largest collection of worksheets in all subjects!

Members, please log in to download this worksheet.

Not a member? Please sign up to gain complete access.



- 4) A balloon seller had 100 balloons. He sold 45 balloons. How many balloons did he have left?

www.mathworksheets4kids.com



- 5) A public park has 121 park benches. On Sunday evening, 57 benches were occupied by the visitors. How many benches were unoccupied?



Name : _____


Answer Key

Subtraction

3-digit & 2-digit: S1


- 1) A farmer planted potatoes in 132 rows and carrots in 15 rows. How many more rows of potatoes have been planted than carrots?

117 rows of potatoes



- 2) Rhea has 324 postage stamps in her stamp collection while Rhone collected 88 of them. How many more stamps does Rhea have than Rhone?

236 stamps



- 3) West Point Primary School has 214 students. If 45 students are dropped off by the bus and 47 students use the bus to go to school, how many students are left? How many students are left in the school?

214 students

Gain complete access to the largest collection of worksheets in all subjects!

Members, please log in to download this worksheet.

Not a member? Please sign up to gain complete access.

www.mathworksheets4kids.com



- 4) A balloon seller had 120 balloons. He sold 58 balloons to a group of children. How many balloons did he have left?

62 balloons



- 5) A public park has 121 park benches. On Sunday evening, 57 benches were occupied by the visitors. How many benches were unoccupied?

64 benches

