

Name : _____

Subtraction

3-digit & 2-digit: S2

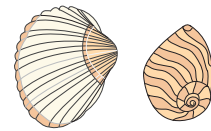
- 1) A total of 523 students enrolled for a Soccer Program at NJ during the summer break. Ninety-eight students were residents of New York City and the rest of them were from NJ. How many students from NJ took part in the program this year?



- 2) There are 225 pastries and cakes altogether in a bakery. The baker sold all the 63 cakes he had. How many pastries remain to be sold?




- 3) Susan collected _____ many seashells _____ her sister Mary. How



- 4) The Summit's _____ mi _____ 79 students did _____ accompanied by _____ ate. The parents of _____ students were _____



- 5) Mr. Blake harvested 213 pumpkins. He gave 31 of them to his neighbours on behalf of Thanksgiving Day and the rest to the farmers market. How many pumpkins were sent to the farmers market?



PREVIEW

Gain complete access to the largest collection of worksheets in all subjects!

Members, please log in to download this worksheet.

Not a member? Please sign up to gain complete access.

www.mathworksheets4kids.com

Name : _____

Answer Key

Subtraction

3-digit & 2-digit: S2

- 1) A total of 523 students enrolled for a Soccer Program at NJ during the summer break. Ninety-eight students were residents of New York City and the rest of them were from NJ. How many students from NJ took part in the program this year?



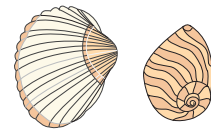
425 students

- 2) There are 225 pastries and cakes altogether in a bakery. The baker sold all the 63 cakes he had. How many pastries remain to be sold?



162 pastries

- 3) Susan collected 100 seashells. Her sister Mary collected 11 seashells. How many seashells did they collect together?



89 seashells


- 4) The Summit's middle school had 1000 students. 254 students did not attend. How many students attended? The parents of 100 students were invited to the school assembly. How many parents attended?

ate. The parents of students were



746 students

- 5) Mr. Blake harvested 213 pumpkins. He gave 31 of them to his neighbours on behalf of Thanksgiving Day and the rest to the farmers market. How many pumpkins were sent to the farmers market?



182 pumpkins

PREVIEW

Gain complete access to the largest collection of worksheets in all subjects!

Members, please log in to download this worksheet.

Not a member? Please sign up to gain complete access.

www.mathworksheets4kids.com