

Name : _____

3-Digit Subtraction

Sheet 3

- 1) A nursery has 135 species of rose plants for rose propagation and grafting. If 103 varieties are selected for grafting, how many species are left back?



- 2) The St. Peter's school employs 323 people for maintenance to upkeep the school. How many women work in the maintenance department if 165 men are employed with them?




- 3) The Heavens Zoo has 120 animals. 55 of them were born in the zoo for over 5 years. The other 65 animals were brought from other zoos. How many animals were brought from other zoos?

Gain complete access to the largest collection of worksheets in all subjects!


Members, please log in to download this worksheet.

Not a member? Please sign up to gain complete access.



- 4) Mr. Dyle bought some items from a store. He handed \$200 to the cashier, how much change did he get?

www.mathworksheets4kids.com




- 5) An archeological museum exhibited 564 artifacts of few ancient civilizations in 1996. Over a period of time, 123 deteriorated exhibits were removed. How many exhibits remain in the museum now?



3-Digit Subtraction

- 1) A nursery has 135 species of rose plants for rose propagation and grafting. If 103 varieties are selected for grafting, how many species are left back?



32 species

- 2) The St. Peter's school employs 323 people for maintenance to upkeep the school. How many women work in the maintenance department if 165 men are employed with them?



158 women


- 3) The Heavens Zoo has 221 animals. The other zoo has 150 animals. How many animals were collected in the zoo for over 5 years. The other zoo has 150 animals. How many animals were collected in the zoo for over 5 years?

Gain complete access to the largest collection of worksheets in all subjects!

Members, please log in to download this worksheet.


Not a member? Please sign up to gain complete access.

www.mathworksheets4kids.com



221 animals

- 4) Mr. Dyle bought a shopping bag. He handed \$200 to the cashier, how much change did he get?



\$93

- 5) An archeological museum exhibited 564 artifacts of few ancient civilizations in 1996. Over a period of time, 123 deteriorated exhibits were removed. How many exhibits remain in the museum now?



441 exhibits