

Name : _____

4-Digit Subtraction

Sheet 1

- 1) The SLGS cargo ship carries 4,000 containers. Of them, 2,786 are 20-foot containers and the remaining are 40-foot containers. How many 40-foot containers have been loaded on to the cargo ship?




- 2) Ryan and Thomas contest for a local boy election. Ryan receives 8,983 votes and Thomas receives 6,298 votes. Find by how many votes Ryan won the election?

- 3) Fred borrowed a sum of money at 10% interest. If he paid back the sum with interest, how much did the sum with interest cost? How much did Fred pay for the sum of money?

- 4) The production of a new toy is done in two phases. The total production is 2,100 toys. In the second phase, 1,200 toys are produced. How many toys were produced in the first phase?

- 5) The Hill Top restaurant used 1,123 pounds of chicken on Thursday. The following day it used 1,562 pounds. How many extra pounds of chicken did the restaurant use on Friday?



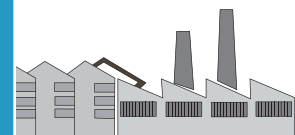
PREVIEW

Gain complete access to the largest collection of worksheets in all subjects!

Members, please log in to download this worksheet.

Not a member? Please sign up to gain complete access.

www.mathworksheets4kids.com




4-Digit Subtraction

- 1) The SLGS cargo ship carries 4,000 containers. Of them, 2,786 are 20-foot containers and the remaining are 40-foot containers. How many 40-foot containers have been loaded on to the cargo ship?



1,214 containers

- 2) Ryan and Thomas contest for a local boy election. Ryan receives 8,983 votes and Thomas receives 6,298 votes. Find by how many votes Ryan won the election?



2,685 votes

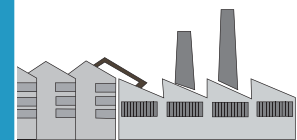
- 3) Fred borrowed a sum of money at 12% interest. If he paid back the sum with interest, how much did the sum with interest cost? How much did Fred pay for the sum of money?

\$180

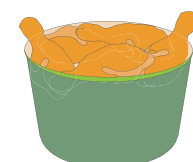


- 4) The production of a new toy is done in two phases. 2,000 workers are employed in the first phase and 1,100 workers are employed in the second phase. How many extra workers are needed in the second phase?

1,191 workers



- 5) The Hill Top restaurant used 1,123 pounds of chicken on Thursday. The following day it used 1,562 pounds. How many extra pounds of chicken did the restaurant use on Friday?



439 pounds

PREVIEW

Gain complete access to the largest collection of worksheets in all subjects!

Members, please log in to download this worksheet.

Not a member? Please sign up to gain complete access.

www.mathworksheets4kids.com