


Name : _____

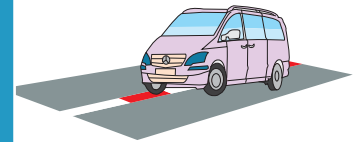
4-Digit Subtraction

Sheet 2

- 1) The outer envelop temperature of the oxy-acetylene flame is $2,300^{\circ}\text{F}$. The inner core temperature of the flame is $5,500^{\circ}\text{F}$. Find the temperature difference between the outer envelop and inner core of the flame?



- 2) Frank and Ethan are on a cross country trip from New York city to San Francisco. They need to cover 3,564 miles. If they have travelled 1,268 miles, how many more miles will they h



- 3) The ex-showroo is \$9,027. Find th the car?

Gain complete access to the largest collection of worksheets in all subjects!

Members, please log in to download this worksheet.

Not a member? Please sign up to gain complete access.


www.mathworksheets4kids.com

the same car on-road on-road price of



- 4) Mr. Higgins inve share value decr worth now?

ket fluctuations, the t on share



- 5) Lily's Pretzel Stand sold 2,156 pretzels last month. This month, 3,987 pretzels were sold out. How many more pretzels were sold this month?

