

Name : _____

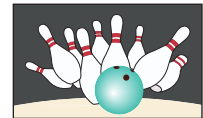
Subtraction

Sheet 2

- 1) There are 8 puppets in a box. Elena picks 4 out. How many puppets remain in the box?



- 2) In a ten-pin bowling match, Harry knocks down 2 pins. How many pins remain standing?

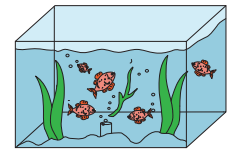


- 3) There are 7 goldfish in a tank. How many fish are left in the tank after you

PREVIEW

Gain complete access to the largest collection of worksheets in all subjects!

put into a fish bowl.



- 4) Clara has 6 blueberry muffins. How many muffins are left if she gives 2 to her brother, and Sara. How

Members, please log in to download this worksheet.

Not a member? Please sign up to gain complete access.

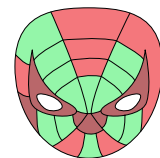
many masks does



- 5) Kate has 9 toy masks. How many masks does she have now?

www.mathworksheets4kids.com

many masks does



- 6) There are 10 tiaras on display in a store. Myra, Elsa, and Holly buy 1 tiara each. How many tiaras remain in the store now?



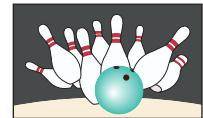
Subtraction

- 1) There are 8 puppets in a box. Elena picks 4 out. How many puppets remain in the box?



4 puppets

- 2) In a ten-pin bowling match, Harry knocks down 2 pins. How many pins remain standing?



8 pins

- 3) There are 7 goldfish in a tank. How many fish are left in the tank?

5 fish

- 4) Clara has 6 blueberry muffins. She gives 3 to her brother, and Sara. How many muffins does she have left?

3 muffins

- 5) Kate has 9 toy masks. She gives 1 to her friend. How many masks does she have now?

8 masks

- 6) There are 10 tiaras on display in a store. Myra, Elsa, and Holly buy 1 tiara each. How many tiaras remain in the store now?



7 tiaras

PREVIEW

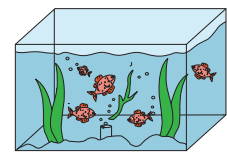
Gain complete access to the largest collection of worksheets in all subjects!

Members, please log in to download this worksheet.

Not a member? Please sign up to gain complete access.

www.mathworksheets4kids.com

put into a fish bowl.



ey, and Sara. How



many masks does

