


Name : _____

Subtraction within 20

Sheet 2

- 1) Marcus has a collection of 15 pink and yellow toy cars. If 7 of them are yellow, how many are pink?



- 2) Jim prepared 18 jars of raspberry jam. He gifted 11 of them to an orphanage nearby. How many jars of raspberry jam does John still have?




- 3) A Ferry wheel has 15 cars. If 8 cars are still riding?

Gain complete access to the largest collection of worksheets in all subjects!

Members, please log in to download this worksheet.

Not a member? Please sign up to gain complete access.

After a spin, how many



- 4) Hugh has 20 baseball cards. If he gives away 12, how many more

baseball cards does he have left?




- 5) Ms. Nina has 6 pet cats, and Ms. Wong has 10 pet cats. How many more cats does Ms. Wong have than Ms. Nina?



Subtraction within 20

- 1) Marcus has a collection of 15 pink and yellow toy cars. If 7 of them are yellow, how many are pink?

8 toy cars



- 2) Jim prepared 18 jars of raspberry jam. He gifted 11 of them to an orphanage nearby. How many jars of raspberry jam does John still have?

PREVIEW

Gain complete access to the largest collection of worksheets in all subjects!

Members, please log in to download this worksheet.

Not a member? Please sign up to gain complete access.

www.mathworksheets4kids.com



- 3) A Ferry wheel has 10 cars. After a spin, how many are still riding?

After a spin, how many



- 4) Hugh has 20 baseball cards. How many more

How many more



5 baseball cards

- 5) Ms. Nina has 6 pet cats, and Ms. Wong has 10 pet cats. How many more cats does Ms. Wong have than Ms. Nina?

4 cats

