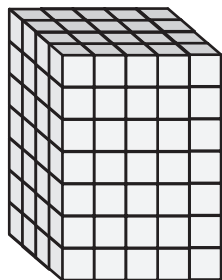


# Surface Area - Counting Squares


Count the unit squares and find the surface area of each rectangular prism.

1)  $\square = 2 \text{ yd}^2$



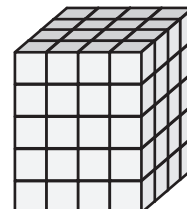
Surface Area = \_\_\_\_\_

2)  $\square = 8 \text{ ft}^2$




Surface Area = \_\_\_\_\_

3)  $\square = 7 \text{ in}^2$




4)  $\square = 5 \text{ in}^2$



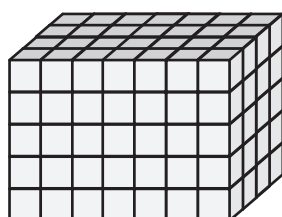
Surface Area = \_\_\_\_\_

$\square = 6 \text{ ft}^2$



Surface Area = \_\_\_\_\_

7)  $\square = 9 \text{ ft}^2$




Surface Area = \_\_\_\_\_

$\square = 3 \text{ yd}^2$



Surface Area = \_\_\_\_\_



Surface Area = \_\_\_\_\_

## PREVIEW

Gain complete access to the largest collection of worksheets in all subjects!

Members, please log in to download this worksheet.

Not a member? Please sign up to gain complete access.

www.mathworksheets4kids.com