


Name : _____

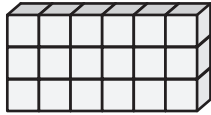
Surface Area - Counting Squares

ES1

Find the surface area of each rectangular prism.


 = 1 ft²

1)




Surface Area = _____

2)




Surface Area = _____

3)



Surface Area = _____

4)



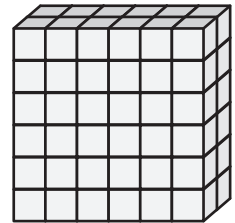
Surface Area = _____

5)



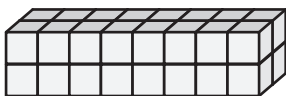
Surface Area = _____

6)




Surface Area = _____

7)



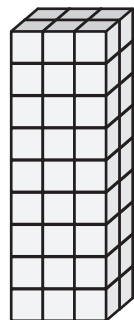
Surface Area = _____

8)



Surface Area = _____

9)



Surface Area = _____

Name : _____

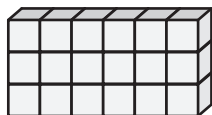
Surface Area - Counting Squares

ES1

Find the surface area of each rectangular prism.


= 1 ft²

1)



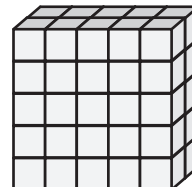
Surface Area = 54 ft²

2)




Surface Area = 112 ft²

3)



Surface Area = 90 ft²

4)




Surface Area = 102 ft²

5)



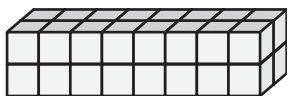
Surface Area = 88 ft²

6)




Surface Area = 120 ft²

7)



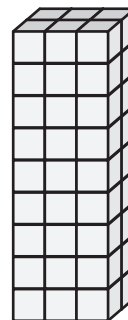
Surface Area = 72 ft²

8)



Surface Area = 106 ft²

9)



Surface Area = 102 ft²