


Name : \_\_\_\_\_

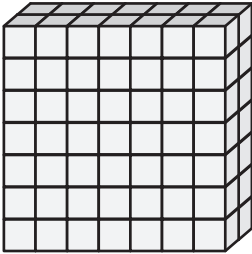
# Surface Area - Counting Squares

ES2

Find the surface area of each rectangular prism.

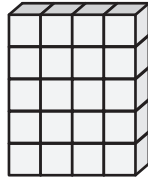
 = 1 in<sup>2</sup>

1)



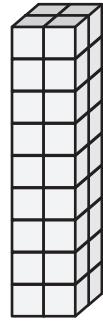
Surface Area = \_\_\_\_\_

2)




Surface Area = \_\_\_\_\_

3)



4)



Surface Area = \_\_\_\_\_


**PREVIEW**

Gain complete access to the largest collection of worksheets in all subjects!

Members, please log in to download this worksheet.

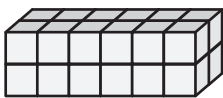
Not a member? Please sign up to gain complete access.

[www.mathworksheets4kids.com](http://www.mathworksheets4kids.com)

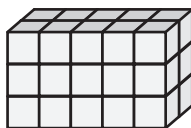


Surface Area = \_\_\_\_\_


7)



Surface Area = \_\_\_\_\_



Surface Area = \_\_\_\_\_



Surface Area = \_\_\_\_\_

Name : \_\_\_\_\_

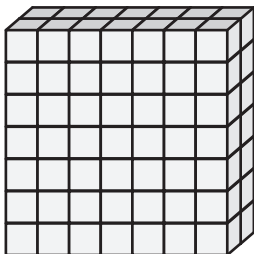
Surface Area - Counting Squares

ES2

Find the surface area of each rectangular prism.

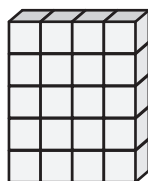
□ = 1 in<sup>2</sup>

1)



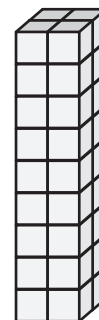
Surface Area = 154 in<sup>2</sup>

2)




Surface Area = 80 in<sup>2</sup>

3)



4)



Surface Area = 118 in<sup>2</sup>

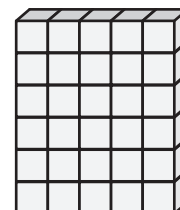
**PREVIEW**

Gain complete access to the largest collection of worksheets in all subjects!

Members, please log in to download this worksheet.

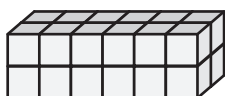
Not a member? Please sign up to gain complete access.

[www.mathworksheets4kids.com](http://www.mathworksheets4kids.com)

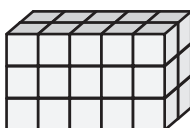


Surface Area = 82 in<sup>2</sup>

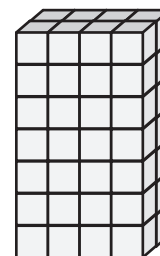
7)



Surface Area = 56 in<sup>2</sup>



Surface Area = 62 in<sup>2</sup>



Surface Area = 100 in<sup>2</sup>