

Name : \_\_\_\_\_

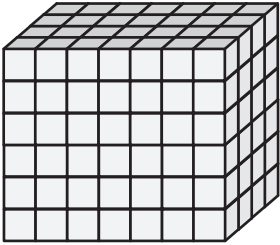
# Surface Area - Counting Squares

MS1

Find the surface area of each rectangular prism.


□ = 1 ft<sup>2</sup>

1)

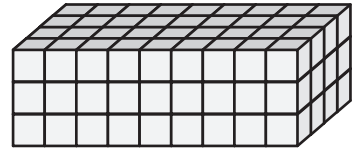


Surface Area = \_\_\_\_\_

2)




3)



Surface Area = \_\_\_\_\_

4)



Surface Area = \_\_\_\_\_

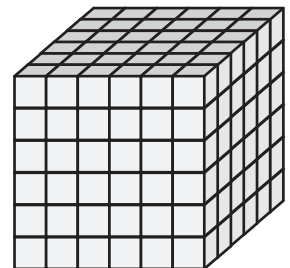
**PREVIEW**

Gain complete access to the largest collection of worksheets in all subjects!

Members, please log in to download this worksheet.

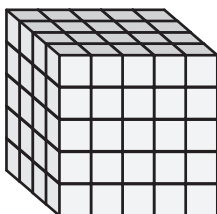
Not a member? Please sign up to gain complete access.

[www.mathworksheets4kids.com](http://www.mathworksheets4kids.com)

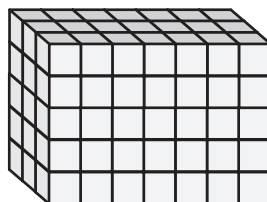


Surface Area = \_\_\_\_\_


7)



Surface Area = \_\_\_\_\_



Surface Area = \_\_\_\_\_



Surface Area = \_\_\_\_\_

Name : \_\_\_\_\_

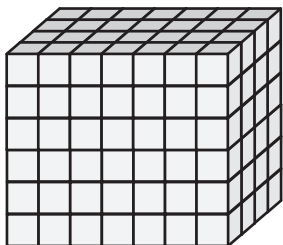
**Surface Area - Counting Squares**

MS1

Find the surface area of each rectangular prism.



□ = 1 ft<sup>2</sup>

1)




Surface Area = **188 ft<sup>2</sup>**

2)



Surface Area = **150 ft<sup>2</sup>**

4)



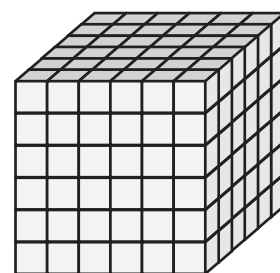
Surface Area = **220 ft<sup>2</sup>**

**PREVIEW**  
Gain complete access to the largest collection of worksheets in all subjects!

Members, please log in to download this worksheet.

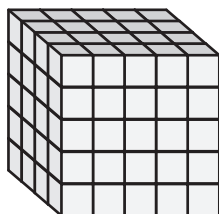
Not a member? Please sign up to gain complete access.

[www.mathworksheets4kids.com](http://www.mathworksheets4kids.com)

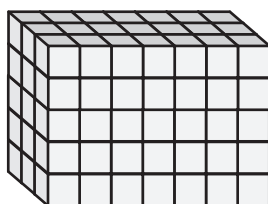


Surface Area = **216 ft<sup>2</sup>**

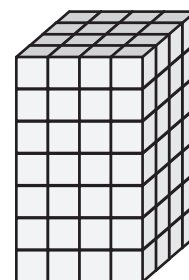
7)



Surface Area = **130 ft<sup>2</sup>**



Surface Area = **142 ft<sup>2</sup>**



Surface Area = **144 ft<sup>2</sup>**