

Name : _____

Score : _____

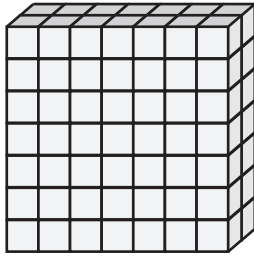
Rectangular Prism - Counting Squares

ES2

□ = 1 yd²


Find the surface area of each rectangular prism.

1)




Surface Area = _____

2)




face Area = _____

3)



4)



Surface Area = _____

Access the largest collection of worksheets for just **\$19.95** per year!

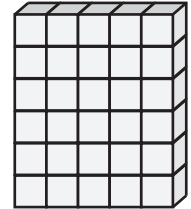
Members, please log in to download this worksheet.

Log in

Not a member? Please sign up to gain complete access.

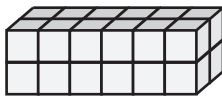
Sign up

www.mathworksheets4kids.com

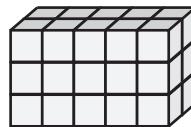


face Area = _____


7)



Surface Area = _____



Surface Area = _____



Surface Area = _____

Name : _____

Answer key

Score : _____

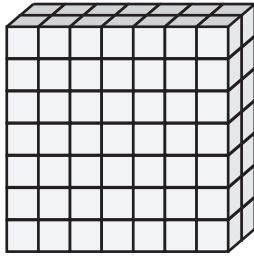
Rectangular Prism - Counting Squares

ES2

□ = 1 yd²


Find the surface area of each rectangular prism.

1)



Surface Area = 154 yd²

2)




3)



face Area = 80 yd²

4)



Surface Area = 118 yd²

PREVIEW
Access the largest collection of
worksheets for just **\$19.95** per year!

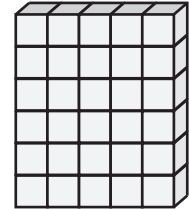
Members, please
log in to
download this
worksheet.

Log in

Not a member?
Please sign up to
gain complete
access.

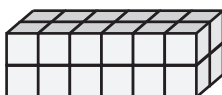
Sign up

www.mathworksheets4kids.com

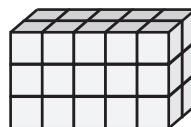


face Area = 82 yd²


7)



Surface Area = 56 yd²



Surface Area = 62 yd²



Surface Area = 100 yd²