

Name : _____

Score : _____

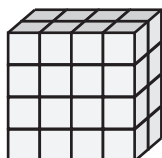
Rectangular Prism - Counting Squares

ES3

□ = 1 ft²

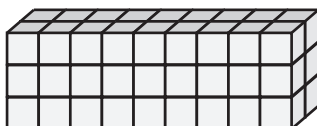
Find the surface area of each rectangular prism.

1)




Surface Area = _____

2)




face Area = _____

3)



4)



Surface Area = _____

Access the largest collection of worksheets for just **\$19.95** per year!


Members, please log in to download this worksheet.

Log in

Not a member? Please sign up to gain complete access.

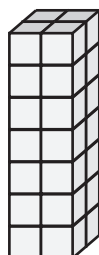
Sign up

www.mathworksheets4kids.com




face Area = _____

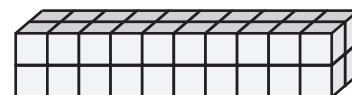
7)



Surface Area = _____



Surface Area = _____



Surface Area = _____

Name : _____

Answer key

Score : _____

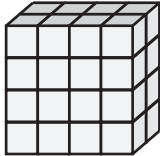
Rectangular Prism - Counting Squares

ES3

$\square = 1 \text{ ft}^2$

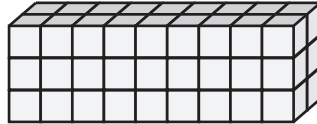
Find the surface area of each rectangular prism.

1)



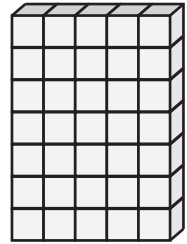
Surface Area = 64 ft²

2)

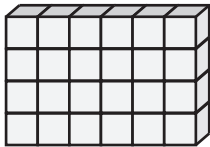


face Area = 94 ft²

3)



4)



Surface Area = 68 ft²

Access the largest collection of worksheets for just **\$19.95** per year!


Members, please log in to download this worksheet.

Log in

Not a member? Please sign up to gain complete access.

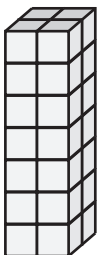
Sign up

www.mathworksheets4kids.com




face Area = 136 ft²

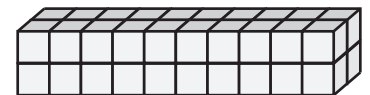
7)



Surface Area = 64 ft²



Surface Area = 136 ft²



Surface Area = 88 ft²